

Year 2 Homework

Please practise all of these items this week. You do not need to bring anything back into school.

We will be having a spelling test every Friday and we will be completing a maths fluency sheet each week.

Reading questions

This is a 'look' question so the exact answer is in the text.



So he was sent to the scrap heap with all of the other old machines.

Spellings

of

said

says

are

were

Maths number

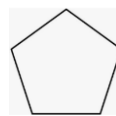
bonds to 10

$$7 + _ = 10$$

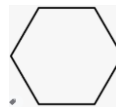
$$_ + 9 = 10$$

$$3 + _ = 10$$

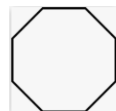
Additional learning



Pentagon



Hexagon



Octagon



This week we have been learning about pentagons, hexagons and octagons. Can you spot these shapes in the real world when you are out and about?